

Name: \_\_\_\_\_

5-a-day

Numeracy




Corbettmaths

**23rd July**

A rule for a sequence is  
"half the previous number."

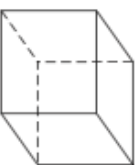
40 20 10    \_    \_

Find the two missing numbers



What percentage of the shape is  
not shaded?

Shade  $\frac{1}{4}$  of this shape



Shown above is a cube

How many faces does the cube  
have?

How many vertices does the cube  
have?

Work out

$$\frac{3}{4} \text{ of } 44m$$

400 of 600 students are girls.

What fraction are girls?  
Simplify your answer.

How many are boys?

Name: \_\_\_\_\_

5-a-day

Numeracy




Corbettmaths

**23rd July**

A rule for a sequence is  
"half the previous number."

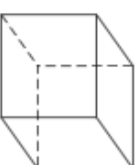
40 20 10    \_    \_

Find the two missing numbers



What percentage of the shape is  
not shaded?

Shade  $\frac{1}{4}$  of this shape



Shown above is a cube

How many faces does the cube  
have?

How many vertices does the cube  
have?

Work out

$$\frac{3}{4} \text{ of } 44m$$

400 of 600 students are girls.

What fraction are girls?  
Simplify your answer.

How many are boys?