

Name: \_\_\_\_\_

5-a-day

Numeracy



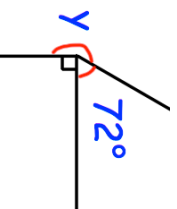
29th July

Draw an acute angle

Draw an obtuse angle

Corbettmaths

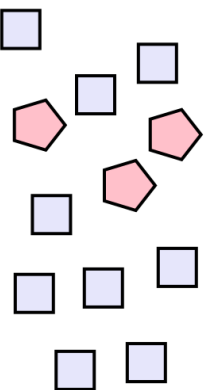
$\frac{3}{5}$  of \$40



Find y

Write down the first 15 square numbers

Write down the ratio of squares to pentagons.  
Simplify your answer.



Name: \_\_\_\_\_

5-a-day

Numeracy



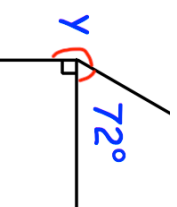
29th July

Draw an acute angle

Draw an obtuse angle

Corbettmaths

$\frac{3}{5}$  of \$40



Find y

Write down the first 15 square numbers

Write down the ratio of squares to pentagons.  
Simplify your answer.

