
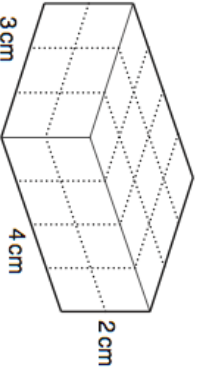
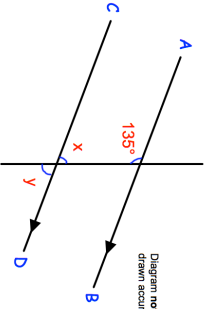

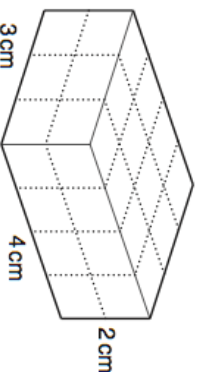
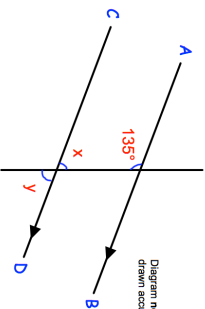


17th November 		Find the surface area of this cuboid. Corbettmaths									
Circle all the cube numbers.	<table border="1" style="width: 100%; text-align: center;"> <tr> <td>20</td> <td>64</td> <td>1</td> </tr> <tr> <td>343</td> <td>300</td> <td>726</td> </tr> <tr> <td>150</td> <td>81</td> <td></td> </tr> </table>	20	64	1	343	300	726	150	81		
20	64	1									
343	300	726									
150	81										
Solve $y + 9 = 13$	Solve $5x = 35$										
Expand $4(y + 2)$	Expand $5(w - 2)$										
Work out the size of the angle marked x . Give a reason for your answer.	 <p style="text-align: center; font-size: small;">Diagram not drawn accurately</p>										

17th November 		Find the surface area of this cuboid. Corbettmaths									
Circle all the cube numbers.	<table border="1" style="width: 100%; text-align: center;"> <tr> <td>20</td> <td>64</td> <td>1</td> </tr> <tr> <td>343</td> <td>300</td> <td>726</td> </tr> <tr> <td>150</td> <td>81</td> <td></td> </tr> </table>	20	64	1	343	300	726	150	81		
20	64	1									
343	300	726									
150	81										
Solve $y + 9 = 13$	Solve $5x = 35$										
Expand $4(y + 2)$	Expand $5(w - 2)$										
Work out the size of the angle marked x . Give a reason for your answer.	 <p style="text-align: center; font-size: small;">Diagram not drawn accurately</p>										