
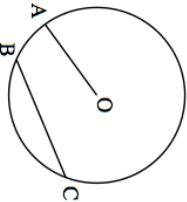
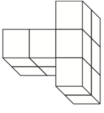
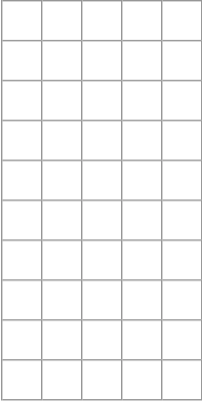

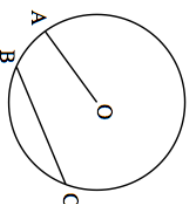
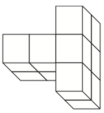
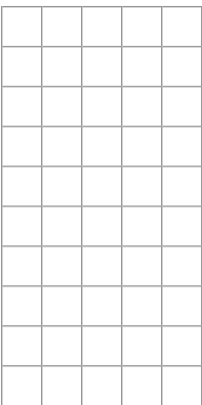


20th November 	Corbettmaths What is the name of the line OA? What is the name of the line BC?
	What is the name of the line OA? What is the name of the line BC?
Weekly wage = basic edge + number of cars sold x bonus payment The basic wage is £250 and a bonus of £20 is paid for every car sold.	Mike sold 9 cars. How much was his weekly wage?
 <p>Draw the side elevation</p>	
Circle the correct word to describe $6y + z$	Equation Expression Identity
Simplify fully $4a - 5c + a - 2c$	Expand and simplify $5(x + 5) - 4(x - 2)$

20th November 	Corbettmaths What is the name of the line OA? What is the name of the line BC?
	What is the name of the line OA? What is the name of the line BC?
Weekly wage = basic edge + number of cars sold x bonus payment The basic wage is £250 and a bonus of £20 is paid for every car sold.	Mike sold 9 cars. How much was his weekly wage?
 <p>Draw the side elevation</p>	
Circle the correct word to describe $6y + z$	Equation Expression Identity
Simplify fully $4a - 5c + a - 2c$	Expand and simplify $5(x + 5) - 4(x - 2)$