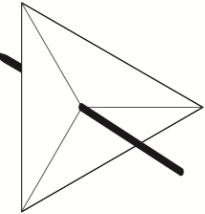







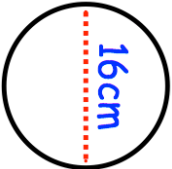
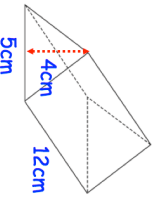
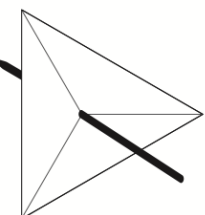







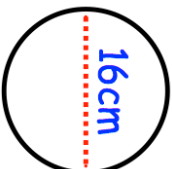
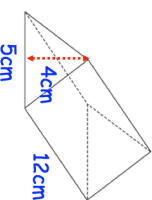


<p>25th November</p>  <p>Corbettmaths</p>	<p>This spinner has three sections. It is certain to land on an even number.</p> <p>Label the spinner.</p>
<p>Square </p> <p>Rectangle </p> <p>Rhombus </p> <p>Trapezium </p> <p>Parallelogram </p> <p>Kite </p>	<p>Which quadrilaterals have diagonals that are equal length?</p>
<p>$y + 3$</p>  <p>y</p>	<p>The diagram shows a rectangle. All measurements are in centimetres.</p> <p>Write an expression, in terms of y, for the area of the rectangle.</p>
<p>Calculate the area</p>	
 <p>Find the volume of the prism.</p>	

<p>25th November</p>  <p>Corbettmaths</p>	<p>This spinner has three sections. It is certain to land on an even number.</p> <p>Label the spinner.</p>
<p>Square </p> <p>Rectangle </p> <p>Rhombus </p> <p>Trapezium </p> <p>Parallelogram </p> <p>Kite </p>	<p>Which quadrilaterals have diagonals that are equal length?</p>
<p>$y + 3$</p>  <p>y</p>	<p>The diagram shows a rectangle. All measurements are in centimetres.</p> <p>Write an expression, in terms of y, for the area of the rectangle.</p>
<p>Calculate the area</p>	
 <p>Find the volume of the prism.</p>	