
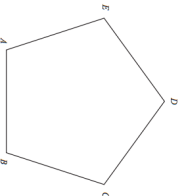
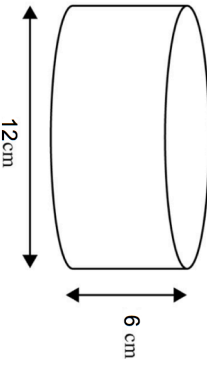

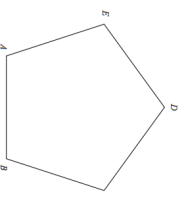


27th November	Corbettmaths 
What is the mathematical name for shape ABCDE?	
Draw all the lines of symmetry on shape ABCDE	What is the order of rotational symmetry for shape ABCDE?
Write these numbers in descending order of size. 45% $\frac{1}{2}$ $\frac{3}{4}$ 0.6 55%	
Each week Mrs Jones earns 20p commission on each ticket she sells for the first 100 tickets and 30p per ticket for any extra tickets she sells. Last week she sold 130 tickets	How much did she earn?
Calculate the volume. Give your answer to 1 decimal place.	

27th November	Corbettmaths 
What is the mathematical name for shape ABCDE?	
Draw all the lines of symmetry on shape ABCDE	What is the order of rotational symmetry for shape ABCDE?
Write these numbers in descending order of size. 45% $\frac{1}{2}$ $\frac{3}{4}$ 0.6 55%	
Each week Mrs Jones earns 20p commission on each ticket she sells for the first 100 tickets and 30p per ticket for any extra tickets she sells. Last week she sold 130 tickets	How much did she earn?
Calculate the volume. Give your answer to 1 decimal place.	