















28th November the cube root of 27	 Corbettmaths
Work out 0.4×0.3	Work out 0.9×1.1
 Square  Rectangle  Rhombus  Trapezium  Parallelogram  Kite	Which quadrilaterals have diagonals that cross at 90° ?
Arrange in order, from largest to smallest $\frac{5}{6}$ $\frac{1}{3}$ $\frac{7}{12}$	
David has four cards, each with a different number written on it. David puts the four cards down to make a number. Each number is made using all four cards. How many different numbers can David make?	<div style="display: flex; justify-content: space-around; align-items: center;"> <div style="border: 1px solid black; border-radius: 10px; width: 30px; height: 30px; display: flex; align-items: center; justify-content: center;">1</div> <div style="border: 1px solid black; border-radius: 10px; width: 30px; height: 30px; display: flex; align-items: center; justify-content: center;">2</div> <div style="border: 1px solid black; border-radius: 10px; width: 30px; height: 30px; display: flex; align-items: center; justify-content: center;">3</div> <div style="border: 1px solid black; border-radius: 10px; width: 30px; height: 30px; display: flex; align-items: center; justify-content: center;">4</div> </div>

28th November the cube root of 27	 Corbettmaths
Work out 0.4×0.3	Work out 0.9×1.1
 Square  Rectangle  Rhombus  Trapezium  Parallelogram  Kite	Which quadrilaterals have diagonals that cross at 90° ?
Arrange in order, from largest to smallest $\frac{5}{6}$ $\frac{1}{3}$ $\frac{7}{12}$	
David has four cards, each with a different number written on it. David puts the four cards down to make a number. Each number is made using all four cards. How many different numbers can David make?	<div style="display: flex; justify-content: space-around; align-items: center;"> <div style="border: 1px solid black; border-radius: 10px; width: 30px; height: 30px; display: flex; align-items: center; justify-content: center;">1</div> <div style="border: 1px solid black; border-radius: 10px; width: 30px; height: 30px; display: flex; align-items: center; justify-content: center;">2</div> <div style="border: 1px solid black; border-radius: 10px; width: 30px; height: 30px; display: flex; align-items: center; justify-content: center;">3</div> <div style="border: 1px solid black; border-radius: 10px; width: 30px; height: 30px; display: flex; align-items: center; justify-content: center;">4</div> </div>