
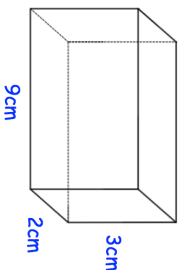
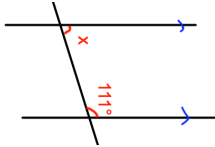

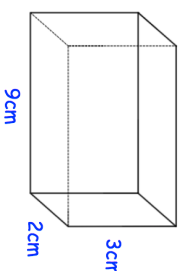


3rd November	 Corbettmaths
<p>A map has a scale of 1cm : 3 miles. On the map, the distance between two towns is 17cm.</p> <p>What is the actual distance between the two towns? Include units for your answer.</p>	
	Work out the volume of the cuboid.
<p style="font-size: 2em; color: blue; text-align: center;">25</p>	
<p>Dennis has a bag of counters. The counters are red, green, white and pink. There are 200 counters in the bag. The probability of a pink counter is 0.15 The probability of a green counter is 0.25 The probability of a red counter is twice the probability of a white counter.</p>	Calculate the number of red counters in the bag.
<p>Work out the size of the angle marked x. Give a reason for your answer.</p>	

3rd November	 Corbettmaths
<p>A map has a scale of 1cm : 3 miles. On the map, the distance between two towns is 17cm.</p> <p>What is the actual distance between the two towns? Include units for your answer.</p>	
	Work out the volume of the cuboid.
<p style="font-size: 2em; color: blue; text-align: center;">25</p>	
<p>Dennis has a bag of counters. The counters are red, green, white and pink. There are 200 counters in the bag. The probability of a pink counter is 0.15 The probability of a green counter is 0.25 The probability of a red counter is twice the probability of a white counter.</p>	Calculate the number of red counters in the bag.
<p>Work out the size of the angle marked x. Give a reason for your answer.</p>	