


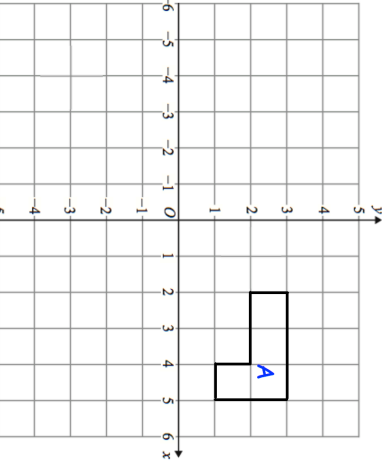



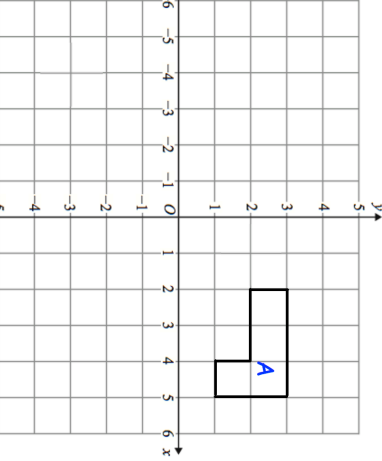


7th November		 Corbettmaths	
The pattern below show the first 3 triangular numbers.	Write down the fourth triangular number.	 Corbettmaths	
			
Nicola selects a cube from a bag containing 6 red, 2 green and 5 white cubes. What is the probability she picks a white cube?	What is the probability she picks a red or white cube?		
			
Rotate shape A 90° anti-clockwise about the origin			
$\frac{3}{4} - \frac{1}{3}$	$\frac{3}{4} + \frac{4}{7}$		

7th November		 Corbettmaths	
The pattern below show the first 3 triangular numbers.	Write down the fourth triangular number.	 Corbettmaths	
			
Nicola selects a cube from a bag containing 6 red, 2 green and 5 white cubes. What is the probability she picks a white cube?	What is the probability she picks a red or white cube?		
			
Rotate shape A 90° anti-clockwise about the origin			
$\frac{3}{4} - \frac{1}{3}$	$\frac{3}{4} + \frac{4}{7}$		