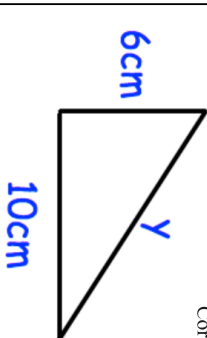

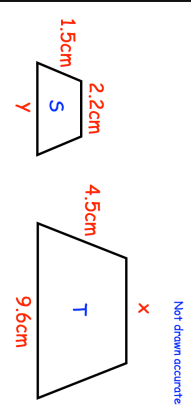
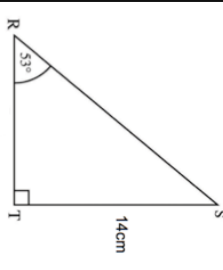
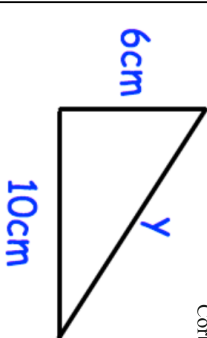

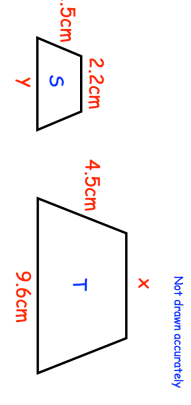
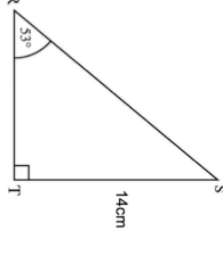


| | | | |
|---|---|--|--|
| 29th September | | Corbettmaths | |
| Find y |  | Corbettmaths | |
|  | Solve $5x + 1 > 9x + 3$ | | |
| Write down the inequality shown above | | | |
| Not drawn accurately | | Trapezium S and trapezium T are similar. | |
|  | Find the size of y. | | |
| An asteroid travels at 25 kilometres per second. How far does it travel in one hour? Give your answer in standard form. | | | |
|  | Find the length of RS. | | |

| | | | |
|---|---|--|--|
| 29th September | | Corbettmaths | |
| Find y |  | Corbettmaths | |
|  | Solve $5x + 1 > 9x + 3$ | | |
| Write down the inequality shown above | | | |
| Not drawn accurately | | Trapezium S and trapezium T are similar. | |
|  | Find the size of y. | | |
| An asteroid travels at 25 kilometres per second. How far does it travel in one hour? Give your answer in standard form. | | | |
|  | Find the length of RS. | | |