
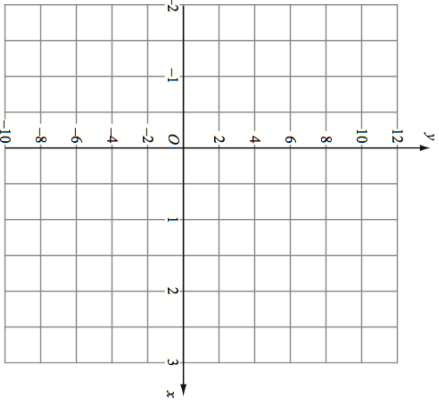

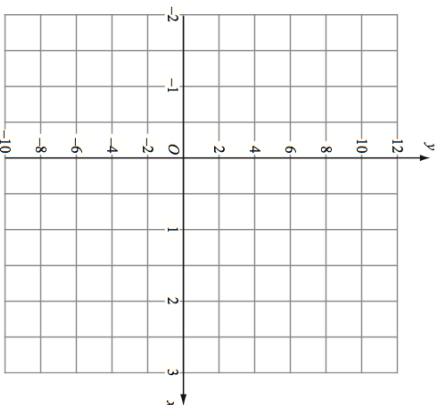


27th September		Corbettmaths 											
Here are the first four terms of a number sequence. 11 15 19 23 Write down the next term of the number sequence.													
The 100th term of the number sequence is 407. Work out the 99th term of the number sequence.													
Complete the table of values for $y = 2x + 4$.													
<table border="1"> <tr> <td>x</td> <td>-1</td> <td>0</td> <td>1</td> <td>2</td> <td>3</td> </tr> <tr> <td>y</td> <td></td> <td>4</td> <td></td> <td></td> <td>10</td> </tr> </table>	x	-1	0	1	2	3	y		4			10	
x	-1	0	1	2	3								
y		4			10								
On the grid, draw the graph of $y = 2x + 4$ for values of x from -1 to 3.													
<table border="1"> <tr> <td>Small bag Contents 3 doughnuts</td> <td>Large bag Contents 5 doughnuts</td> </tr> <tr> <td>£1.08</td> <td>£1.70</td> </tr> </table>	Small bag Contents 3 doughnuts	Large bag Contents 5 doughnuts	£1.08	£1.70	Which is better value for money? Show your working								
Small bag Contents 3 doughnuts	Large bag Contents 5 doughnuts												
£1.08	£1.70												

27th September		Corbettmaths 											
Here are the first four terms of a number sequence. 11 15 19 23 Write down the next term of the number sequence.													
The 100th term of the number sequence is 407. Work out the 99th term of the number sequence.													
Complete the table of values for $y = 2x + 4$.													
<table border="1"> <tr> <td>x</td> <td>-1</td> <td>0</td> <td>1</td> <td>2</td> <td>3</td> </tr> <tr> <td>y</td> <td></td> <td>4</td> <td></td> <td></td> <td>10</td> </tr> </table>	x	-1	0	1	2	3	y		4			10	
x	-1	0	1	2	3								
y		4			10								
On the grid, draw the graph of $y = 2x + 4$ for values of x from -1 to 3.													
<table border="1"> <tr> <td>Small bag Contents 3 doughnuts</td> <td>Large bag Contents 5 doughnuts</td> </tr> <tr> <td>£1.08</td> <td>£1.70</td> </tr> </table>	Small bag Contents 3 doughnuts	Large bag Contents 5 doughnuts	£1.08	£1.70	Which is better value for money? Show your working								
Small bag Contents 3 doughnuts	Large bag Contents 5 doughnuts												
£1.08	£1.70												