

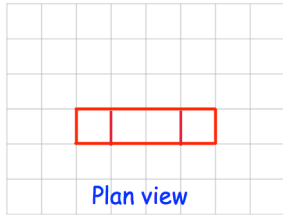
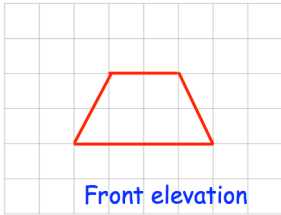
12th May




Corbettmaths

Find the n th term of 9.2, 8.9, 8.6, ...

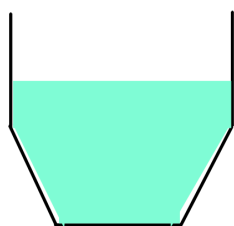

Find the 30th term



On the grid, draw the side elevation.



Draw a sketch of the solid shape.



Water pours steadily into containers A and B. Both containers are empty before the water is poured in. Sketch graphs to show the depth of water over time.

