

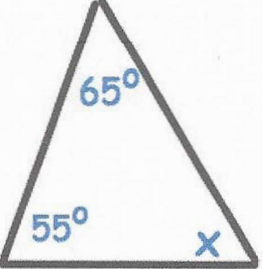


| 19th June   |  |
|---|--|
| Write $\frac{1}{4}$ as a percentage   | <br>Corbettmaths<br><br>25% |
| List the square numbers between 60 and 110.   | List the prime numbers between 20 and 30.  |
| 64, 81, 100   | 23, 29 <del>11</del> <del>17</del>   |
| The red line shows which part of a circle?  |                             |
|  | Find x   |
| $55 + 65 = 120$<br>$180 - 120$  | 60°  |
| $3 \times 2 + 8$<br>$6 + 8 = 14$  | $3 \times 4 + 10 \times 2$<br>$12 + 20 = 32$   |