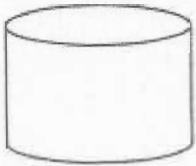




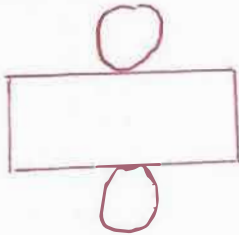
7th May

Name this 3D shape

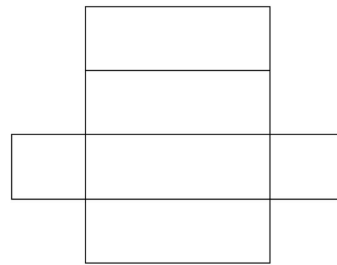


Cylinder

Draw a net for the shape above



Draw a net for a cuboid



$0.84 \div 10$

0.084

$31400 \div 1000$

31.4

Write $\frac{4}{5}$ as a decimal

0.8

Write $\frac{3}{4}$ as a percentage

75%

Kellie sells 4 books of raffle tickets
There are 10 tickets in each book.

How many tickets does she sell?

40

Each ticket costs 50p

How much money does she receive?

£20