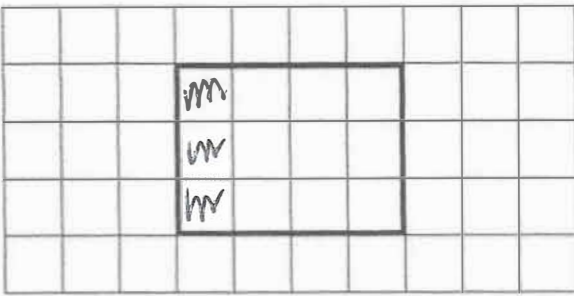


22nd August



Corbettm@ths


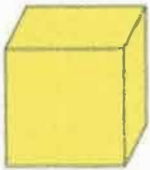


Shade 25% of the rectangle

Simplify fully

$$\frac{60}{80} = \frac{6}{8} = \boxed{\frac{3}{4}}$$

Sketch the net of a cube



List the square numbers between 20 and 70

25, 36, 49, 64

List the prime numbers under 20.

2, 3, 5, 7, 11, 13, 17, 19

Martin sells 12 books of raffle tickets
There are 10 tickets in each book.

How many tickets does he sell?

120

Each ticket costs 30p

How much money does he receive?

$$120 \times 30 = 3600$$

£36