


**25th August**

Corbettmaths



The rectangle is drawn on a centimetre grid.

What is its area?

How many minutes are in half an hour?

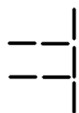
How many minutes are in two and a half hours?

Esme says that  $36 + 8 \div 4 = 11$

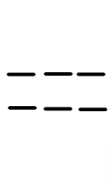
Is Esme correct? Explain why



Pattern 1



Pattern 2



Pattern 3

Draw Pattern 4

Work out the number that is halfway between 125 and 275