

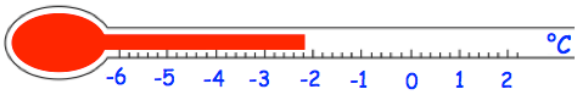
26th August

Corbettmaths

12 8 16 3 19 36

Write down one number from the list that is a multiple of 6

Write down the square numbers from the list

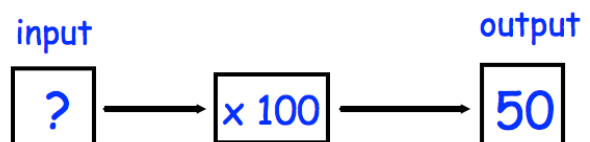
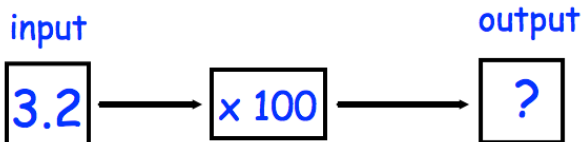


Write down the temperature on the thermometer.

The temperature falls by 3°C

Work out the new temperature.

Work out $6.8 - 1.47$



Work out 30% of 160