

28th August

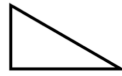


Corbettmaths

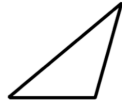
Match the triangles to the correct names.

Triangle

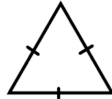
Name



Isosceles



Right angled



Equilateral



Scalene

Work out

$-9 + 4$

Arrange in order from smallest to largest

0.77   0.277   0.8   0.709

A TV programme began at 08:55 and ended at 10:20.

How long did it last?

Complete each sentence by writing in a sensible **metric** unit.

The amount of paint in a tin is

2.5 .....

The length of a page is

297 .....