

26th December



Corbettmαths

39 x 12

468

128 x 3

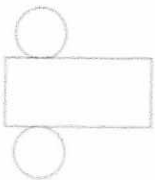
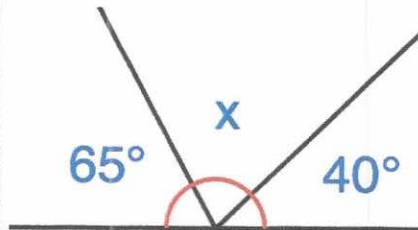
384

Work out $19.6 - 12.7$

6.9

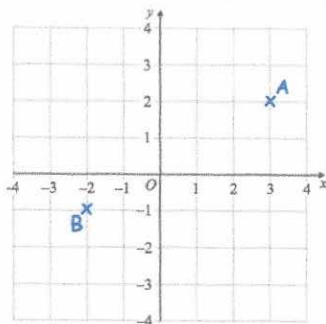
Work out the size of the angle x

75°



This is the net for a 3D shape.

Sketch the 3D shape.



Write down the coordinates of A.

(3, 2)

Write down the coordinates of B.

(-2, -1)