

10th February

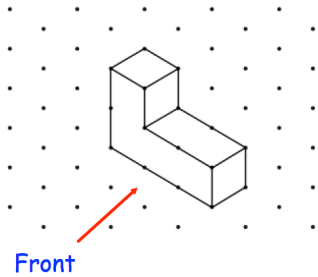


Corbettmαths


Which is larger?

$\frac{1}{2}$ of 280 or $\frac{3}{8}$ of 400

Show your working.

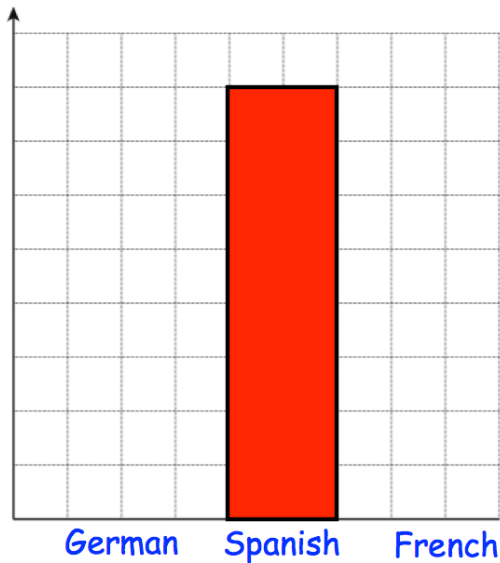


Draw the front elevation



A TV costs £x.
A DVD player costs £45 less than the TV.

Write an expression for the total cost of the TV and DVD player.



Miss Jackson asked the 32 students in her tutor group which language they study.

Each student studies one language only.
Half of the students in the tutor group study Spanish.
Six more students study German than French.

Complete the bar chart.