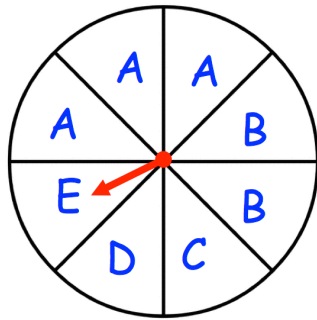


28th February

Corbettmαths

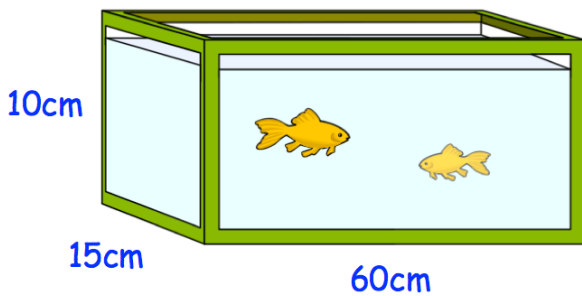


A fair spinner has eight equal sections.

What is the probability that the arrow lands on a B or a C?

Arrange in order, starting with the smallest

$$3^2 \quad \sqrt{100} \quad 4^2 \quad \sqrt{80}$$



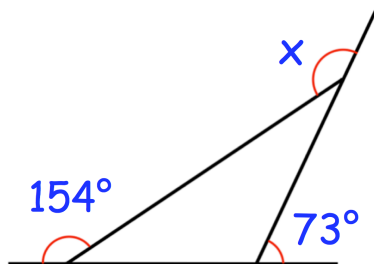
Find the volume of the fish tank

There are red sweets and yellow sweets in a bag.

$\frac{5}{6}$ of the sweets are yellow.

There are 20 yellow sweets in the bag.

Work out how many sweets in total are in the bag.



Find the size of angle x.