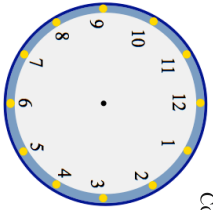

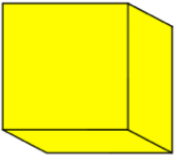


Name: \_\_\_\_\_

5-a-day

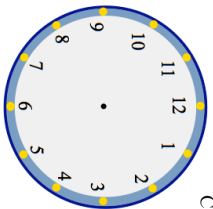

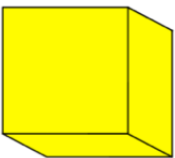
Numeracy

<b>10th July</b> Show the time 10:45pm on the clock	
Sarah buys an apple for 41p and a banana for 27p. How much more expensive are 5 apples than 5 bananas?	
Simon has made a mistake. Explain his mistake.	$\begin{array}{r} 859 \\ + 176 \\ \hline 1025 \end{array}$
	How many edges does a cube have?
	
Simplify fully $\frac{25}{35}$	

Name: \_\_\_\_\_

5-a-day

Numeracy

<b>10th July</b> Show the time 10:45pm on the clock	
Sarah buys an apple for 41p and a banana for 27p. How much more expensive are 5 apples than 5 bananas?	
Simon has made a mistake. Explain his mistake.	$\begin{array}{r} 859 \\ + 176 \\ \hline 1025 \end{array}$
	How many edges does a cube have?
	
Simplify fully $\frac{25}{35}$	