

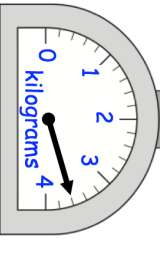
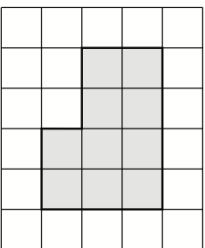



<p>18th July</p> 	<p>Corbettmaths</p> <p>This is a centimetre grid. What is the perimeter of the shape?</p>
<p>Lunch cost £6.80</p> <p>Tim pays with a £10 note.</p> <p>How much change should he get?</p>	
<p>In 1999, the 28th September was a Tuesday.</p> <p>What day was the 3rd October?</p>	
	<p>Four identical gold bars are placed on a set of scales. Work out the weight of one bar of gold. Include units.</p>
	

<p>18th July</p> 	<p>Corbettmaths</p> <p>This is a centimetre grid. What is the perimeter of the shape?</p>
<p>Lunch cost £6.80</p> <p>Tim pays with a £10 note.</p> <p>How much change should he get?</p>	
<p>In 1999, the 28th September was a Tuesday.</p> <p>What day was the 3rd October?</p>	
	<p>Four identical gold bars are placed on a set of scales. Work out the weight of one bar of gold. Include units.</p>
