
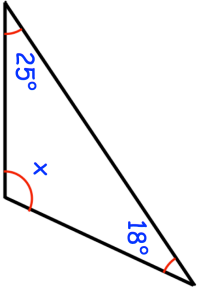
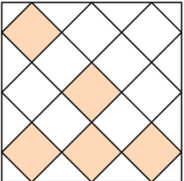

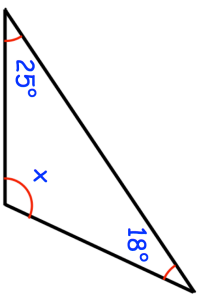
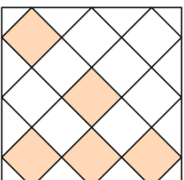


26th July	 Corbettmaths								
	Find x								
Draw a pair of parallel lines	Draw a pair of perpendicular lines								
Shade one more square so this pattern has one line of symmetry.									
Finn organises a charity film showing. The tally chart shows the tickets sold. <table border="1" data-bbox="391 152 518 539"> <thead> <tr> <th>Group</th> <th>Tally</th> </tr> </thead> <tbody> <tr> <td>Children</td> <td>## ## ## ## II</td> </tr> <tr> <td>Adults</td> <td>### ### I</td> </tr> <tr> <td>Pensioners</td> <td>III</td> </tr> </tbody> </table> <p> An adult ticket is £10. A child ticket is half the price of an adult ticket. A pensioner pays £3 less than an adult. </p>	Group	Tally	Children	## ## ## ## II	Adults	### ### I	Pensioners	III	How much money did Finn raise for charity?
Group	Tally								
Children	## ## ## ## II								
Adults	### ### I								
Pensioners	III								

26th July	 Corbettmaths								
	Find x								
Draw a pair of parallel lines	Draw a pair of perpendicular lines								
Shade one more square so this pattern has one line of symmetry.									
Finn organises a charity film showing. The tally chart shows the tickets sold. <table border="1" data-bbox="391 1240 518 1628"> <thead> <tr> <th>Group</th> <th>Tally</th> </tr> </thead> <tbody> <tr> <td>Children</td> <td>## ## ## ## II</td> </tr> <tr> <td>Adults</td> <td>### ### I</td> </tr> <tr> <td>Pensioners</td> <td>III</td> </tr> </tbody> </table> <p> An adult ticket is £10. A child ticket is half the price of an adult ticket. A pensioner pays £3 less than an adult. </p>	Group	Tally	Children	## ## ## ## II	Adults	### ### I	Pensioners	III	How much money did Finn raise for charity?
Group	Tally								
Children	## ## ## ## II								
Adults	### ### I								
Pensioners	III								