
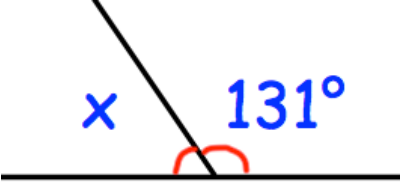




27th July		 Corbettmaths
	Find x	49°
 $27 + 27 + 28 = 82\text{p}$	A red apple cost 27p A green apple cost 28p	What is the total cost for two red apples and one green apple?
Arrange in order: 3.4 3 3.331 3.5 3.42 from smallest to largest		$3, 3.331, 3.4, 3.42, 3.5$
A hula hoop has a radius of 26cm. What is the diameter of the hula hoop? 52cm		
Work out 293×25 7325		