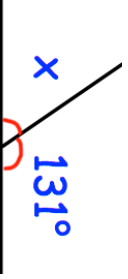




Name: _____

5-a-day

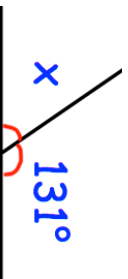


Numeracy

<p>27th July</p>  <p>Find x</p> <p>Corbettmaths</p>	<p>A red apple cost 27p A green apple cost 28p</p> <p>What is the total cost for two red apples and one green apple?</p>
 <p>Arrange in order: 3.4 3 3.331 3.5 3.42 from smallest to largest</p>	
<p>A hula hoop has a radius of 26cm. What is the diameter of the hula hoop?</p>	
<p>Work out 293 x 25</p>	

Name: _____

5-a-day

Numeracy

<p>27th July</p>  <p>Find x</p> <p>Corbettmaths</p>	<p>A red apple cost 27p A green apple cost 28p</p> <p>What is the total cost for two red apples and one green apple?</p>
 <p>Arrange in order: 3.4 3 3.331 3.5 3.42 from smallest to largest</p>	
<p>A hula hoop has a radius of 26cm. What is the diameter of the hula hoop?</p>	
<p>Work out 293 x 25</p>	