





28th July		Corbettmaths 		
Name this shape				
Michael and Rosie each have a bottle of water.	How many more millilitres of water does Rosie have?			
Michael's bottle contains $1\frac{3}{4}$ litres				
Rosie's bottle contains 2.2 litres.				
Departure times				
Antrim	12:30	13:00	14:00	16:00
Randalstown	12:45	13:15	14:15	16:15
Ballymena	13:01	13:31	14:31	16:31
Ballycastle	13:39	14:09	15:09	17:09
James gets 16:15 bus from Randalstown to Ballycastle.				
How long does this journey take?				
The journey costs £4.90 He pays in the least possible number of coins.				
How many coins did he use? What were these coins?				

28th July		Corbettmaths 		
Name this shape				
Michael and Rosie each have a bottle of water.	How many more millilitres of water does Rosie have?			
Michael's bottle contains $1\frac{3}{4}$ litres				
Rosie's bottle contains 2.2 litres.				
Departure times				
Antrim	12:30	13:00	14:00	16:00
Randalstown	12:45	13:15	14:15	16:15
Ballymena	13:01	13:31	14:31	16:31
Ballycastle	13:39	14:09	15:09	17:09
James gets 16:15 bus from Randalstown to Ballycastle.				
How long does this journey take?				
The journey costs £4.90 He pays in the least possible number of coins.				
How many coins did he use? What were these coins?				