
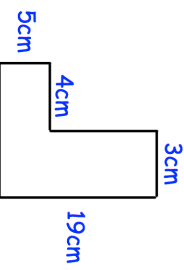

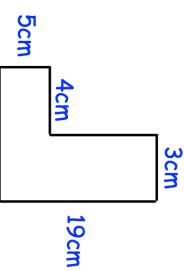


3rd July	Corbettmaths 										
$\begin{array}{r} 4 \quad \square \\ + \quad \square \quad 4 \\ \hline 7 \quad 2 \end{array}$											
<table border="1"> <thead> <tr> <th>City</th> <th>Distance from London</th> </tr> </thead> <tbody> <tr> <td>Los Angeles</td> <td>8766 km</td> </tr> <tr> <td>Sydney</td> <td>17012 km</td> </tr> <tr> <td>Tokyo</td> <td>9577 km</td> </tr> <tr> <td>Cape Town</td> <td>9680 km</td> </tr> </tbody> </table>	City	Distance from London	Los Angeles	8766 km	Sydney	17012 km	Tokyo	9577 km	Cape Town	9680 km	Which of these cities is the furthest away from London?
City	Distance from London										
Los Angeles	8766 km										
Sydney	17012 km										
Tokyo	9577 km										
Cape Town	9680 km										
Which number in the table is a multiple of 10?											
Carly needs 42000 blocks of Lego to build a large castle. The lego blocks are sold in boxes of 2000.	How many boxes of lego does she need?										
	Find the area										

3rd July	Corbettmaths 										
$\begin{array}{r} 4 \quad \square \\ + \quad \square \quad 4 \\ \hline 7 \quad 2 \end{array}$											
<table border="1"> <thead> <tr> <th>City</th> <th>Distance from London</th> </tr> </thead> <tbody> <tr> <td>Los Angeles</td> <td>8766 Km</td> </tr> <tr> <td>Sydney</td> <td>17012 km</td> </tr> <tr> <td>Tokyo</td> <td>9577 km</td> </tr> <tr> <td>Cape Town</td> <td>9680 km</td> </tr> </tbody> </table>	City	Distance from London	Los Angeles	8766 Km	Sydney	17012 km	Tokyo	9577 km	Cape Town	9680 km	Which of these cities is the furthest away from London?
City	Distance from London										
Los Angeles	8766 Km										
Sydney	17012 km										
Tokyo	9577 km										
Cape Town	9680 km										
Which number in the table is a multiple of 10?											
Carly needs 42000 blocks of Lego to build a large castle. The lego blocks are sold in boxes of 2000.	How many boxes of lego does she need?										
	Find the area										