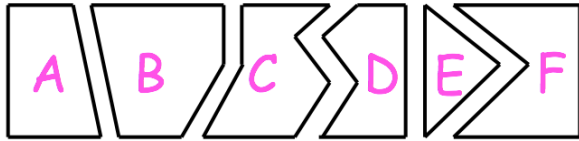


7th July



Corbettmaths



Write the letters of the shape that are pentagons.

B, F

Round 293 to the nearest 10

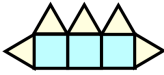
290

Round 293 to the nearest 100

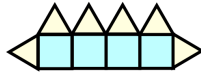
300



Pattern 1

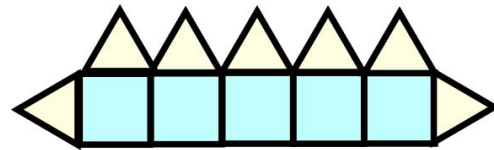


Pattern 2



Pattern 3

Draw pattern 4



Four tickets for a trip cost a total of £156.

Work out the cost of one ticket.

$$156 \div 4 = \text{£}39$$

Draw a 75 degree angle

