

Name: _____

5-a-day

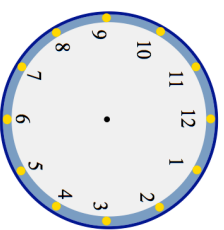
Numeracy

11th November



Draw a hexagon

What is the name of a 7 sided shape?



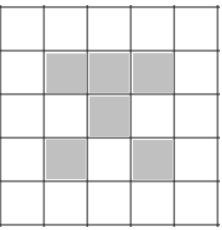
Show the time 4.25 on the clock

Seven pens cost £1.54
Two pens and a ruler cost £1

What is the cost of one ruler?

Victoria thinks 33 is a prime number.

Explain why she is wrong.



Shade in one more square to make a pattern with 2 lines of symmetry.

Name: _____

5-a-day

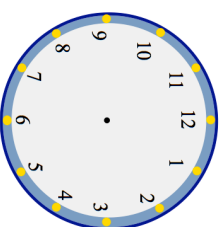
Numeracy

11th November



Draw a hexagon

What is the name of a 7 sided shape?



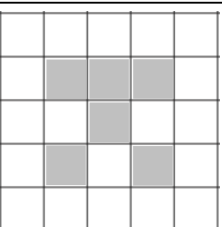
Show the time 4.25 on the clock

Seven pens cost £1.54
Two pens and a ruler cost £1

What is the cost of one ruler?

Victoria thinks 33 is a prime number.

Explain why she is wrong.



Shade in one more square to make a pattern with 2 lines of symmetry.