

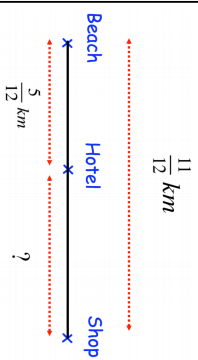
16th November

Draw a right angle

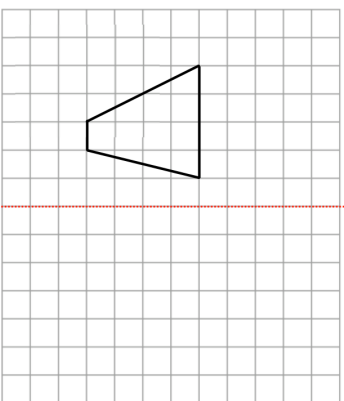
Draw a reflex angle



Find the distance from the hotel to the shop.



Name the shape drawn on the grid.



Reflect the shape in the mirror line

Write $\frac{1}{8}$ as a decimalWrite $\frac{1}{8}$ as a percentage

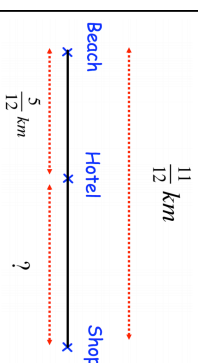
16th November

Draw a right angle

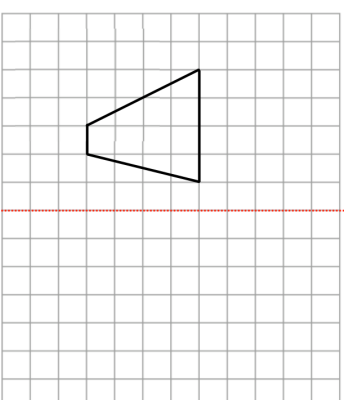
Draw a reflex angle



Find the distance from the hotel to the shop.



Name the shape drawn on the grid.



Reflect the shape in the mirror line

Write $\frac{1}{8}$ as a decimalWrite $\frac{1}{8}$ as a percentage