

Name: _____

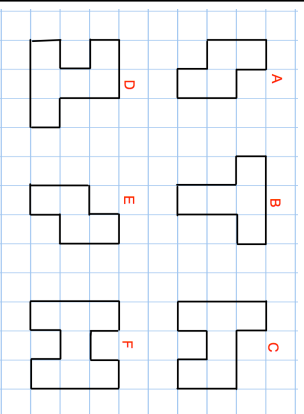
5-a-day

Numeracy

19th November


Round 179.6 to the nearest whole number

Round 12.48 to the nearest whole number



Which shape is congruent to A?

Name two other congruent shapes.



Find the area of the square

Find the perimeter of the square

$$\frac{6}{11} + \frac{2}{11}$$

$$\frac{6}{11} - \frac{2}{11}$$

Name: _____

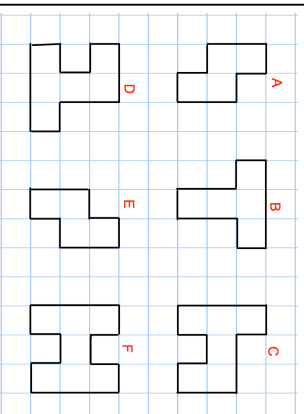
5-a-day

Numeracy

19th November


Round 179.6 to the nearest whole number

Round 12.48 to the nearest whole number



Which shape is congruent to A?

Name two other congruent shapes.



Find the area of the square

Find the perimeter of the square

$$\frac{6}{11} + \frac{2}{11}$$

$$\frac{6}{11} - \frac{2}{11}$$