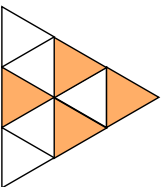


Name: \_\_\_\_\_

5-a-day

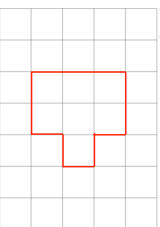
Numeracy

9th October



What fraction of this shape is unshaded?

Below is a shape on centimetre square paper.



Work out the perimeter

Write down the value of the digit 3 in the answer to

$$938 \times 100$$

The table shows the temperature at 5am on two days in May.

4th May	5th May	6th May
-6°C	3°C	

Work out the difference in temperature on the 4th May and the temperature on the 5th May.

The temperature on 6th May was 5°C lower than on the 5th May.

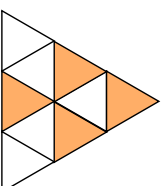
What was the temperature on the 6th May?

Name: \_\_\_\_\_

5-a-day

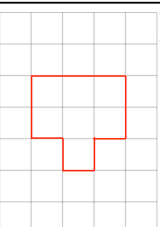
Numeracy

9th October



What fraction of this shape is unshaded?

Below is a shape on centimetre square paper.



Work out the perimeter

Write down the value of the digit 3 in the answer to

$$938 \times 100$$

The table shows the temperature at 5am on two days in May.

4th May	5th May	6th May
-6°C	3°C	

Work out the difference in temperature on the 4th May and the temperature on the 5th May.

The temperature on 6th May was 5°C lower than on the 5th May.

What was the temperature on the 6th May?