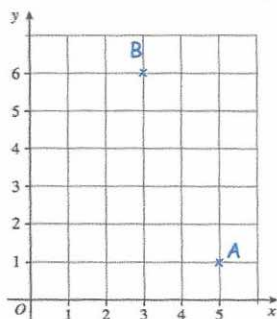


13th September



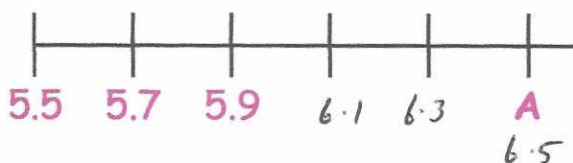
Corbettmαths



Write down the coordinates of A

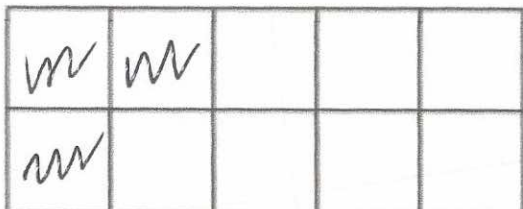
 $(5, 1)$ 

Write down the coordinates of B

 $(3, 6)$ 

What number is shown by the letter A on the scale?

6.5



Shade 30% of this rectangle.

Nine friends share £1926.

How much do they each receive?

$$\begin{array}{r} 0214 \\ 9 \overline{) 1926} \end{array}$$

£214

1   2   3   4   5   6

A card is picked at random

Write down the probability that the card is even

 $\frac{1}{2}$