

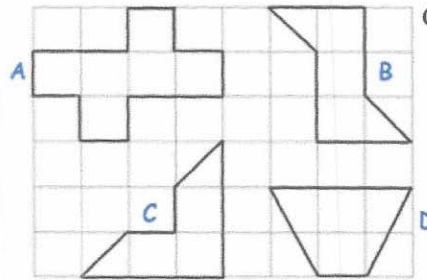
21st September



Corbettm@ths

Which two shapes have a line of symmetry?

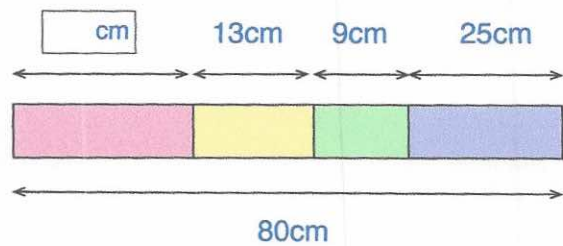
C & D



Calculate the length of the first block.

$$13 + 9 + 25 = 47$$


$$80 - 47 = \underline{33\text{cm}}$$



The thermometer shows the temperature at 6am.  
The temperature increases by  $9^{\circ}\text{C}$  by 10am.

What is the temperature at 10am?

$6^{\circ}\text{C}$



Mrs Jones gave her class a test.  
Two fifths of the class failed the test.  
There are 25 students in the class.

How many failed the test?



$$25 \div 5 = 5$$

$$5 \times 2 = \underline{10}$$

Work out  $149 \times 34$

$$\begin{array}{r} 149 \\ \times 34 \\ \hline 596 \\ 4470 \\ \hline 5066 \end{array}$$

5066