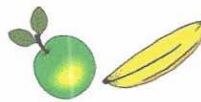


**22nd September**

Corbettm@ths

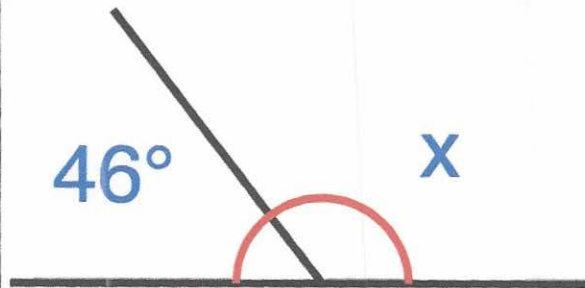
Daniel buys an apple for 39p and a banana for 27p. How much does he pay in total?

$$\begin{array}{r} 39 \\ + 27 \\ \hline 66 \text{ p} \end{array}$$



Find the size of angle x


$$\begin{array}{r} 7 \\ 180 \\ - 46 \\ \hline 134 \end{array} \quad 134^\circ$$



8 Doughnuts per box



14 Cupcakes per box



Ruby buys 4 boxes of cupcakes and 1 box of doughnuts.

Ruby says "I have seven times more cupcakes than doughnuts."

Is Ruby correct?

$$\begin{array}{r} 14 \\ \times 4 \\ \hline 56 \end{array}$$

$$8 \times 7 = 56$$

yes

Write down the most suitable metric unit to measure:

The length of a football pitch

metres

The weight of a coin.

grams

The first term of a sequence is 2.  
The rule for finding the next term in the sequence is "multiply by 3."

Write down the first 5 terms of the sequence

2, 6, 18, 54, 162