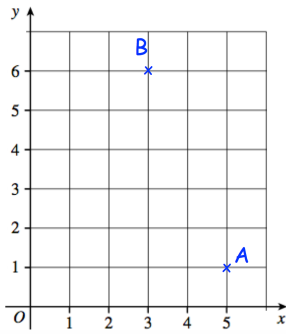


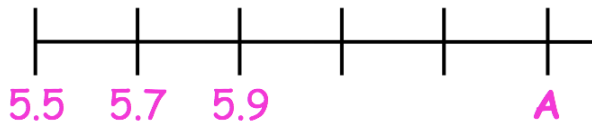
13th September

Corbettmαths

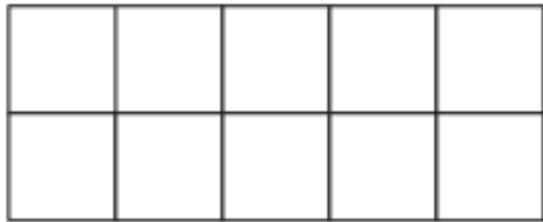


Write down the coordinates of A

Write down the coordinates of B



What number is shown by the letter A on the scale?



Shade 30% of this rectangle.

Nine friends share £1926.

How much do they each receive?



A card is picked at random

Write down the probability that the card is even