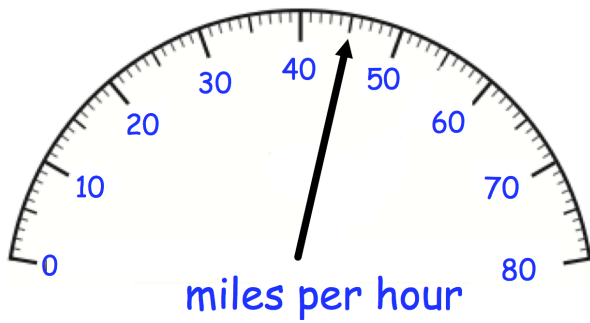



**14th September**

Corbettmαths

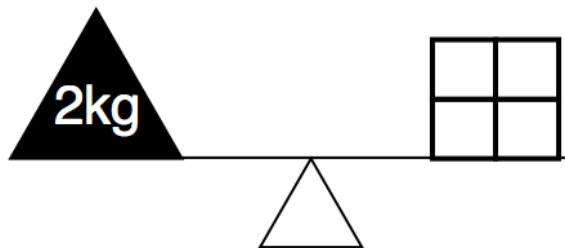


The speed limit is 70mph

How many miles per hour below the speed limit is the car travelling?



What fraction of the shape is shaded?

Write **seven thousand, eight hundred and nineteen** in figures.

Four identical blocks weigh 2kg in total. Find the weight of one block.

Work out  $966 \div 7$