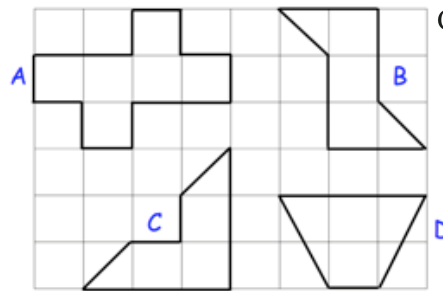


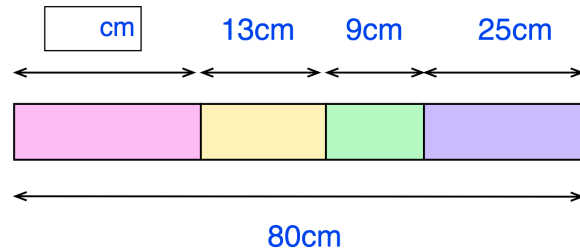
**21st September**

Corbettmαths

Which two shapes have a line of symmetry?

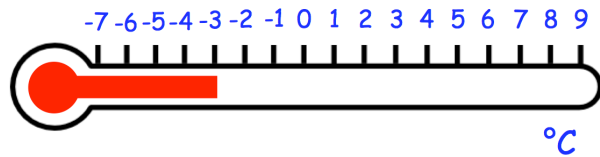


Calculate the length of the first block.



The thermometer shows the temperature at 6am.  
The temperature increases by  $9^{\circ}\text{C}$  by 10am.

What is the temperature at 10am?



Mrs Jones gave her class a test.  
Two fifths of the class failed the test.  
There are 25 students in the class.

How many failed the test?



Work out  $149 \times 34$