


Name: _____

5-a-day

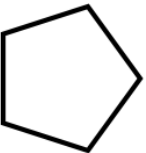
Numeracy

3rd September

Name this shape



Name this shape



Matthew has six coins that each has the same value.

In total he has £1.20.

What coins does he have?

Work out $5.4 + 3.7$

Karen says "the sum of an odd number and an even number is always odd."

Show she is correct

3 bananas cost 63p

How much will 5 bananas cost?


Name: _____

5-a-day

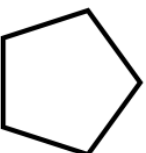
Numeracy

3rd September

Name this shape



Name this shape



Matthew has six coins that each has the same value.

In total he has £1.20.

What coins does he have?

Work out $5.4 + 3.7$

Karen says "the sum of an odd number and an even number is always odd."

Show she is correct

3 bananas cost 63p

How much will 5 bananas cost?