




<p>17th May</p>		 CorbettmOths
<p style="text-align: center;">Menu</p> <p>Burger 90p Egg 70p Chips 80p Mash 65p Drink 55p</p>	<p>Una buys a portion of chips. She pays with 5p pieces. How many does she need?</p> <p style="text-align: center;">$80 \div 5 = 16$</p>	
<p>Freddy buys three burgers, two portions of chips and a drink.</p> <p>How much does this cost?</p>	<p style="text-align: center;"> $\pounds 2.70$ $\pounds 1.60$ $\pounds 0.55$ <hr style="width: 50%; margin: 0 auto;"/> $\pounds 4.85$ </p>	
<div style="text-align: center;">  </div> <p>What percentage of this shape is shaded?</p>	<p style="font-size: 2em;">75%</p>	
<p>Shown below is Mike</p> <div style="text-align: center;">  </div>	<p>Circle the most appropriate estimate for his height.</p> <p style="text-align: center;"> 1.8mm 1.8cm 1.8m 1.8km </p>	
<p>Add together:</p> <ul style="list-style-type: none"> - The number of days in June - The number of seconds in a minute - The number of months in a year 	<p style="font-size: 1.5em;"> 30 60 $+ 12$ <hr style="width: 50%; margin: 0 auto;"/> 102 </p>	