
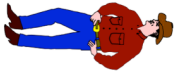


Name: _____

5-a-day



Numeracy

17th May		Corbettmaths
Menu Burger 90p Egg 70p Chips 80p Mash 65p Drink 55p	Una buys a portion of chips. She pays with 5p pieces. How many does she need?	
Freddy buys three burgers, two portions of chips and a drink. How much does this cost?		
		
What percentage of this shape is shaded?		
Shown below is Mike 	Circle the most appropriate estimate for his height. 1.8mm 1.8cm 1.8m 1.8km	
Add together: - The number of days in June - The number of seconds in a minute - The number of months in a year		

Name: _____

5-a-day

Numeracy

17th May		Corbettmaths
Menu Burger 90p Egg 70p Chips 80p Mash 65p Drink 55p	Una buys a portion of chips. She pays with 5p pieces. How many does she need?	
Freddy buys three burgers, two portions of chips and a drink. How much does this cost?		
		
What percentage of this shape is shaded?		
Shown below is Mike 	Circle the most appropriate estimate for his height. 1.8mm 1.8cm 1.8m 1.8km	
Add together: - The number of days in June - The number of seconds in a minute - The number of months in a year		