




17th May		 Corbettmaths
<p style="text-align: center; color: blue;"><b>Menu</b></p> <p><b>Burger</b>     90p</p> <p><b>Egg</b>        70p</p> <p><b>Chips</b>      80p</p> <p><b>Mash</b>      65p</p> <p><b>Drink</b>     55p</p>	<p>Una buys a portion of chips. She pays with 5p pieces. How many does she need?</p>	
<p>Freddy buys three burgers, two portions of chips and a drink.</p> <p>How much does this cost?</p>		
<div style="text-align: center;">  </div> <p>What percentage of this shape is shaded?</p>		
<p>Shown below is Mike</p> <div style="text-align: center;">  </div>		<p>Circle the most appropriate estimate for his height.</p> <p>1.8mm     1.8cm     1.8m     1.8km</p>
<p>Add together:</p> <ul style="list-style-type: none"> <li>- The number of days in June</li> <li>- The number of seconds in a minute</li> <li>- The number of months in a year</li> </ul>		