

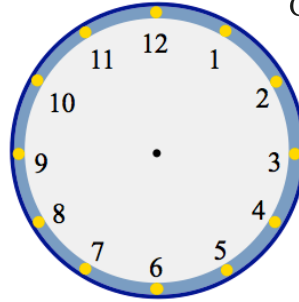
17th April

Numeracy 5-a-day



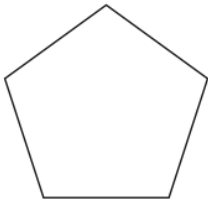
Corbettmαths

Show the time 11:25 on the clock



Work out  $10 + 2 \times 4$

Work out  $10 \div 2 + 12 \div 3$

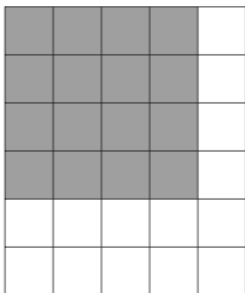


Name \_\_\_\_\_

Name \_\_\_\_\_

meter reading  
Jan 5463  
June 5651

How many units of electricity have been used?



What fraction of the grid is shaded?

Give your answer in its simplest form.