

6th April

Numeracy 5-a-day

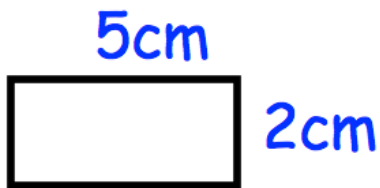


Corbettmαths

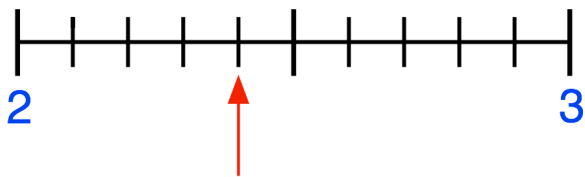
Work out $2300 + 1700$

Write your answer in words.

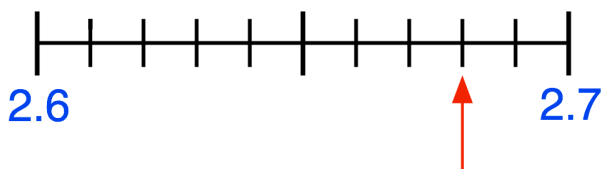
$$\square - 14 = 89$$



Calculate the perimeter



What number is the arrow pointing to?



What number is the arrow pointing to?