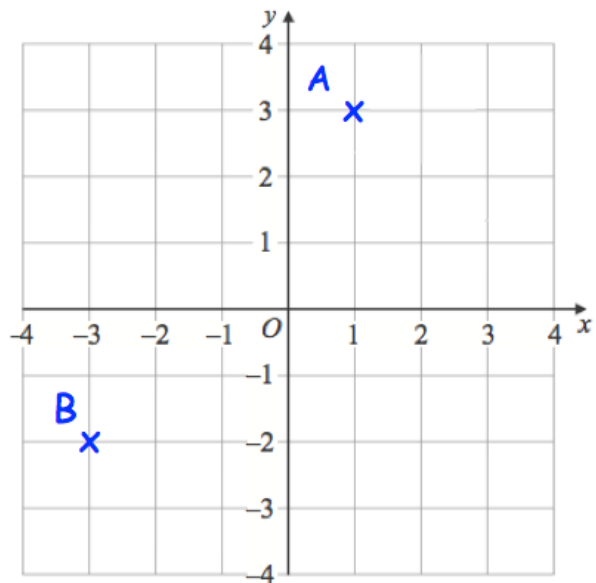




Work out  $10^2$

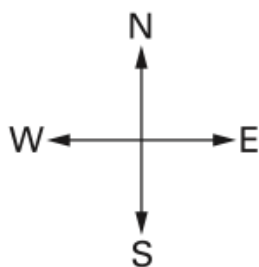

Work out  $5^2 + 4^2$

Write down the coordinates of the point A.



Write down the coordinates of the point B.

What fraction of the grid is shaded?



Maciej is facing South.  
He turns clockwise through 90 degrees.

Which direction is he now facing?