

A



B



C

Shape A is called a .....


Shape B is called a .....

Shape C is called a .....

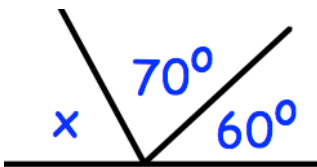
There are 23 passengers on a bus.

At a stop, 14 passengers get off the bus and 8 passengers get on the bus.

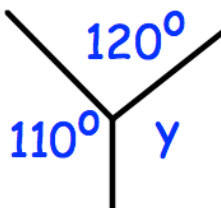
How many passengers are now on the bus?



From the numbers in the grid, write down the number that is not prime.



Find x



Find y