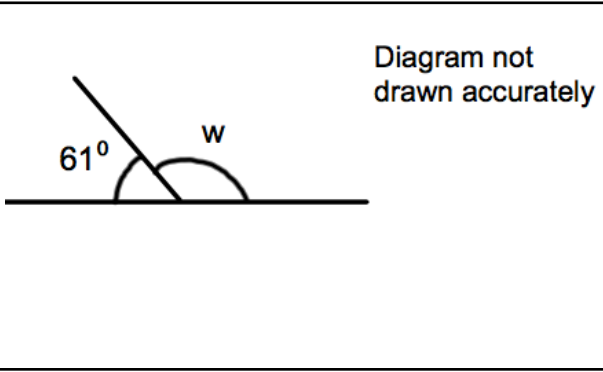


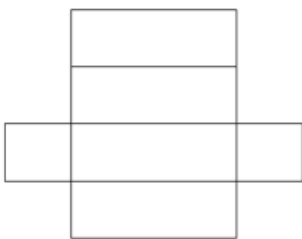


Calculate $52 + 165$

Work out $471 - 356$

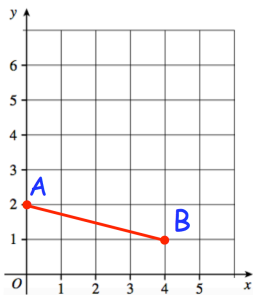


Find the size of the angle w .



Shown is a net for a solid.

Write down the name of the solid.



Write the coordinates of point A

Write the coordinates of point B

Choose a sensible **metric** unit for the following

The distance from Bath to London

is 179 _____

The height of the tallest living person is

246 _____