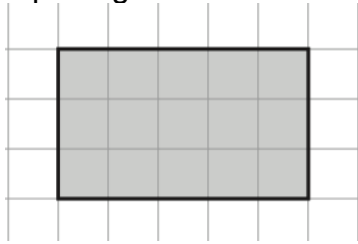


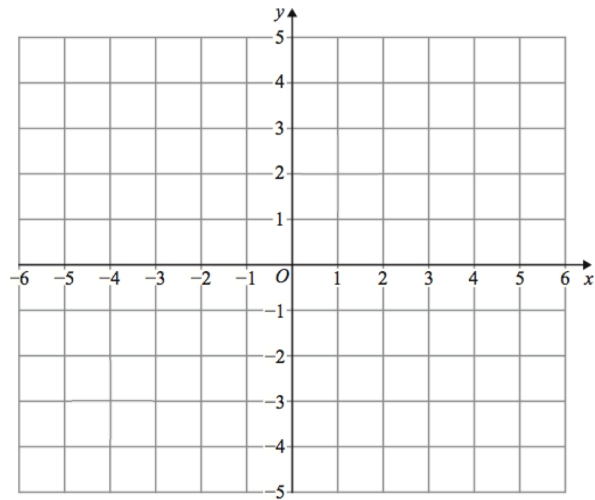


Shown is a rectangle on a centimetre square grid.



Work out the area

Work out the perimeter



Plot the points with these coordinates

A(-2, 1)

B(4, 1)

C(4, -3)

Name the shape ABC



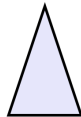
A



B



C



D

Which shape has 4 lines of symmetry

Which shapes have 1 line of symmetry

Which shape has 5 lines of symmetry