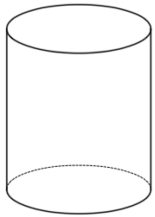
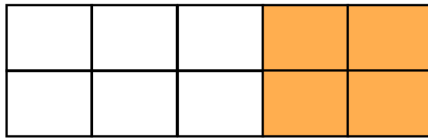




What fraction of this shape is shaded?
Give your answer in its simplest form.



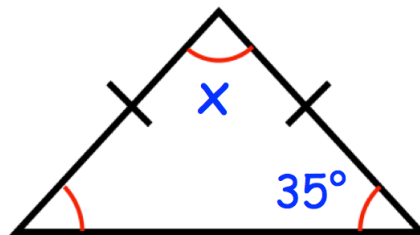
Name this solid

Draw the net of a square based pyramid.

37×18

$2837 + 829$

Find x



	2	36	100
52		4	54
16		60	

Circle all the multiples of 4